

**Al-Mustaqbal university**  
**Engineering technical college**  
**Department of Building**  
**&Construction Engineering**



***Mathematics***

***First class***

***Lecture no.2***

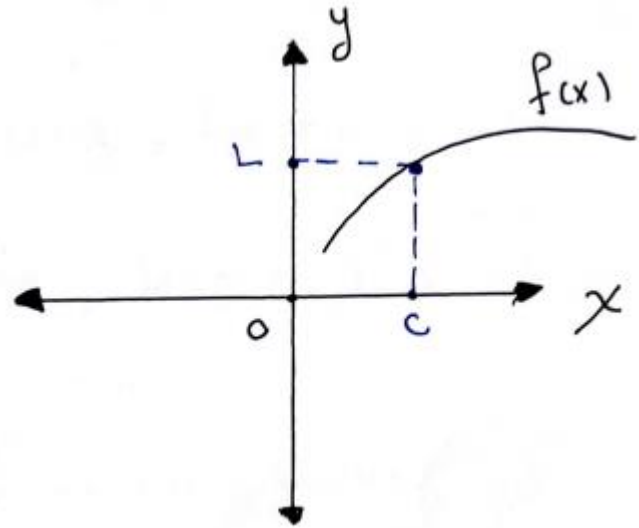
***Assist. Lecture***

***Alaa Hussein AbdUlameer***

## Limits:

When the values of a function  $f(x)$  approach the value  $L$  as  $X$  Approaches  $C$ , we say that  $F(x)$  has limit  $L$  as  $X$  Approaches  $C$ .

$$\text{OR: } \lim_{x \rightarrow c} f(x) = L$$



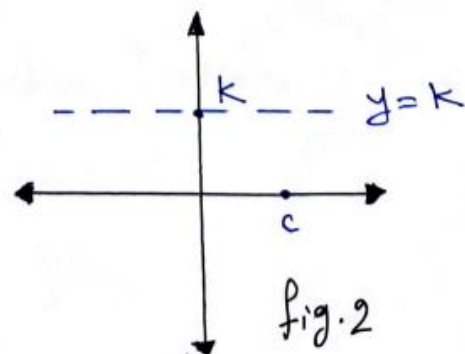
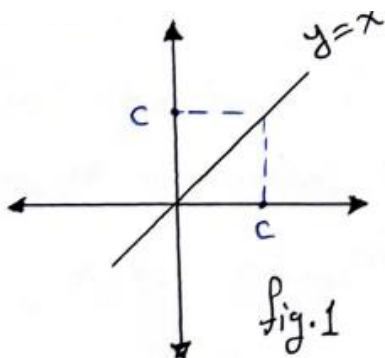
\*Notes:

1. For identify function ( $f(x)=x$ )

$$\lim_{x \rightarrow c} x = c$$

2. For constant function ( $f(x)=k$ )

3.  $\lim_{x \rightarrow c} k = k$



Properties of limits:

For

$$\lim_{x \rightarrow c} F_1(x) = L_1 \quad \& \quad \lim_{x \rightarrow c} F_2(x) = L_2$$

$$1. \lim_{x \rightarrow c} [ F_1(x) \pm F_2(x) ] = L_1 \pm L_2$$

$$2. \lim_{x \rightarrow c} [ F_1(x) \times F_2(x) ] = L_1 \times L_2$$

$$3. \lim_{x \rightarrow c} [ F_1(x) \div F_2(x) ] = L_1 \div L_2 \quad L_2 \neq 0$$

$$4. \lim_{x \rightarrow c} [ F_1(x) \times k ] = k \times L_1 \quad k: \text{constant}$$

- If  $F_1(x) = a_n x^n + a_{n-1} x^{n-1} + \dots \dots \dots a_0$  is any polynomial function:
- $\lim_{x \rightarrow c} f(x) = f(c) = a_n c^n + a_{n-1} c^{n-1} + \dots \dots \dots a_0$

Ex (1): find the limit of the function  $f(x)=x+1$  as  $x$  approaches 3?

Sol/

$$f(x)=x+1$$

$$\lim_{x \rightarrow c} f(x) = \lim_{x \rightarrow 3} x + 1$$

$$\lim_{x \rightarrow 3} x + \lim_{x \rightarrow 3} 1$$

$$3 + 1 = 4$$

Ex (2):

$$\lim_{x \rightarrow 3} \frac{x^3 - 27}{x - 3}$$

$$\frac{(0)^3 - 27}{0 - 3} = \frac{0}{0}$$

$$\lim_{x \rightarrow 3} \frac{(x - 3)(x^2 + 3x + 9)}{(x - 3)}$$

$$\lim_{x \rightarrow 3} (x^2 + 3x + 9)$$

$$(3^2 + 3(3) + 9) = 27$$

Ex (3): Evaluate

$$\lim_{x \rightarrow 1} \frac{x^2 + x - 2}{x^2 - x}$$

$$\frac{1^2 + 1 - 2}{1^2 - 1} = \frac{0}{0}$$

$$\lim_{x \rightarrow 1} \frac{(x + 2)(x - 1)}{x(x - 1)}$$

$$\lim_{x \rightarrow 1} \frac{(x + 2)}{x}$$

$$\frac{1 + 2}{1} = 3$$

Ex (4) find the limits:

$$\lim_{x \rightarrow 5} \frac{4}{x - 7}$$

$$\frac{4}{5 - 7} = \frac{4}{-2} = -2$$

Ex (5) find the limits:

$$\lim_{x \rightarrow 2} \frac{x^2 - 7x - 10}{x - 2}$$

$$\lim_{x \rightarrow 2} \frac{(x - 2)(x - 5)}{(x - 2)}$$

$$\lim_{x \rightarrow 2} (x - 5) = 2 - 5 = -3$$

EX (6):

$$f(x) = \begin{cases} 3 - x & .x < 2 \\ \frac{x}{2} + 1 & .x > 2 \end{cases}$$

a - find  $\lim_{x \rightarrow 2} f(x)$  and  $\lim_{x \rightarrow -2} f(x)$

b - dose  $\lim_{x \rightarrow -2} f(x)$  exist? why

Sol/

$$a - \lim_{x \rightarrow 2} f(x) = \lim_{x \rightarrow 2} \frac{x}{2} + 1 = \frac{2}{2} + 1 = 2$$

$$b - \lim_{x \rightarrow -2} f(x) = \lim_{x \rightarrow -2} (3 - x) = 3 - 2 = 1$$

$$\lim_{x \rightarrow 2} f(x) \neq \lim_{x \rightarrow -2} f(x)$$

Limit does not exist

Ex (7):

$$\begin{aligned} & \lim_{x \rightarrow 1} \frac{x^3 - 1}{(x - 1)^2} \\ & \lim_{x \rightarrow 1} \frac{(x - 1)(x^2 + x + 1)}{(x - 1)(x - 1)} \\ & \lim_{x \rightarrow 1} \frac{(x^2 + x + 1)}{(x - 1)} \end{aligned}$$

H.W/ Let:

$$f(x) = \begin{cases} 3 - x & .x < 2 \\ \frac{x}{2} & .x > 2 \end{cases}$$

a- Find  $\lim_{x \rightarrow 2} f(x)$  and  $\lim_{x \rightarrow -2} f(x)$

b - dose  $\lim_{x \rightarrow -2} f(x)$  exist? why

Ex : find  $\lim_{x \rightarrow -2} \frac{\frac{1}{x} + \frac{1}{2}}{x^3 + 8}$

$$\lim_{x \rightarrow -2} \frac{\frac{(x+2)}{2x}}{(x+2)(x^2 - 2x + 4)}$$

$$\begin{aligned} & \lim_{x \rightarrow -2} \frac{1}{2x(x^2 - 2x + 4)} \\ &= \frac{1}{2(-2)((-2)^2 - 2(-2) + 4)} \\ &= \frac{-1}{48} \end{aligned}$$

Ex:

$$\lim_{x \rightarrow 4} \frac{3 - \sqrt{x+5}}{x-4}$$

$$\lim_{x \rightarrow 4} \frac{3 - \sqrt{x+5}}{x-4} * \frac{3 + \sqrt{x+5}}{3 + \sqrt{x+5}}$$

$$\lim_{x \rightarrow 4} \frac{9 - (x+5)}{x-4(3 + \sqrt{x+5})}$$

$$\lim_{x \rightarrow 4} \frac{4-x}{x-4(3 + \sqrt{x+5})}$$

$$\lim_{x \rightarrow 4} \frac{-(x-4)}{(x-4)(3 + \sqrt{x+5})}$$

$$\lim_{x \rightarrow 4} \frac{-1}{(3 + \sqrt{x+5})} = \frac{-1}{(3 + \sqrt{4+5})} = \frac{-1}{6}$$

## The sandwiches theorem

$f(x), h(x), g(x)$  are functions

$$\text{if } f(x) \leq h(x) \leq g(x)$$

The sandwiches theorem is:

$$\text{For all } x \neq c \text{ and } \lim_{x \rightarrow c} g(x) = \lim_{x \rightarrow c} h(x) = L$$

$$\text{Then } \lim_{x \rightarrow c} f(x) = L$$

$$\text{Ex (1): find } \lim_{x \rightarrow 0} x^4 \cos \frac{1}{x}$$

$$-1 \leq \cos \frac{1}{x} \leq 1$$

$$\left[ -1 \leq \cos \frac{1}{x} \leq 1 \right] * x^4$$

$$-x^4 \leq x^4 \cos \frac{1}{x} \leq x^4$$

$$\lim_{x \rightarrow 0} -x^4 \leq \lim_{x \rightarrow 0} x^4 \cos \frac{1}{x} \leq \lim_{x \rightarrow 0} x^4$$

$$\lim_{x \rightarrow 0} -x^4 = (0)^4 = 0 \quad g(x)$$

$$\lim_{x \rightarrow 0} x^4 = (0)^4 = 0 \quad h(x)$$

$$0 \leq \cos \frac{1}{x} \leq 0$$

$$h(x) = g(x)$$

Cross ponding to sandwiches theory

$$\lim_{x \rightarrow 0} x^4 \cos \frac{1}{x} = 0 \quad f(x)$$

Ex (2): find  $\lim_{x \rightarrow 0} (x^2 \sin \frac{1}{\sqrt{x}})$

Sol/

$$-1 \leq \sin \frac{1}{\sqrt{x}} \leq 1$$

$$\left[ -1 \leq \sin \frac{1}{\sqrt{x}} \leq 1 \right] * x^2$$

$$-x^2 \leq x^2 \sin \frac{1}{\sqrt{x}} \leq x^2$$

$$\lim_{x \rightarrow 0} -x^2 \leq \lim_{x \rightarrow 0} x^2 \sin \frac{1}{\sqrt{x}} \leq \lim_{x \rightarrow 0} x^2$$

$$\lim_{x \rightarrow 0} -x^2 = -(0)^2 = 0 \quad g(x)$$

$$\lim_{x \rightarrow 0} x^2 = (0)^2 = 0 \quad h(x)$$

Sandwiches theory is:

$$\lim_{x \rightarrow 0} x^2 \sin \frac{1}{\sqrt{x}} = 0 \quad f(x)$$

Ex (3): find  $\lim_{x \rightarrow \infty} \frac{\cos x}{x^2 + 1}$

Sol/

$$-1 \leq \cos x \leq 1$$

$$[-1 \leq \cos x \leq 1] \div (x^2 + 1)$$

$$\frac{-1}{x^2 + 1} \leq \frac{\cos x}{x^2 + 1} \leq \frac{1}{x^2 + 1}$$

$$\lim_{x \rightarrow \infty} \frac{-1}{x^2 + 1} \leq \lim_{x \rightarrow \infty} \frac{\cos x}{x^2 + 1} \leq \lim_{x \rightarrow \infty} \frac{1}{x^2 + 1}$$

$$\lim_{x \rightarrow \infty} \frac{-1}{x^2 + 1} = \frac{-1}{\infty^2 + 1} = \frac{-1}{\infty^2} = 0 \dots g(x)$$

$$\lim_{x \rightarrow \infty} \frac{1}{x^2 + 1} = \frac{1}{\infty^2 + 1} = \frac{1}{\infty^2} = 0 \dots h(x)$$

By sandwiches theory



$$\lim_{x \rightarrow \infty} \frac{\cos x}{x^2 + 1} = 0 \dots f(x)$$

Ex (4):

Find  $\lim_{x \rightarrow \infty} \frac{2 - \cos x}{x^2 + 3}$  by using sandwiches theorem?

Sol/

$$-1 \leq \cos x \leq 1$$

$$[-1 \leq \cos x \leq 1] * -1$$

$$1 \geq -\cos x \geq -1$$

$$[1 \geq -\cos x \geq -1] + 2$$

$$1 + 2 \geq 2 - \cos x \geq -1 + 2$$

$$[3 \geq 2 - \cos x \geq +1] \div (x^2 + 1)$$

$$\frac{3}{x^2 + 1} \geq \frac{2 - \cos x}{x^2 + 1} \geq \frac{+1}{x^2 + 1}$$

$$\lim_{x \rightarrow \infty} \frac{3}{x^2 + 1} \geq \lim_{x \rightarrow \infty} \frac{2 - \cos x}{x^2 + 1} \geq \lim_{x \rightarrow \infty} \frac{+1}{x^2 + 1}$$

$$\lim_{x \rightarrow \infty} \frac{3}{x^2 + 1} = \frac{3}{\infty^2 + 1} = \frac{3}{\infty^2} = 0 \dots \dots g(x)$$

$$\lim_{x \rightarrow \infty} \frac{+1}{x^2 + 1} = \frac{1}{\infty^2 + 1} = \frac{1}{\infty^2} = 0 \dots \dots h(x)$$

By using sandwiches:

$$\lim_{x \rightarrow \infty} \frac{2 - \cos x}{x^2 + 1} = 0 \dots \dots f(x)$$

Ex (5): find  $\lim_{X \rightarrow 4} g(x)$  for the function

$$\lim_{X \rightarrow 4} |g(x) - 5| \leq 3(x - 4)^2$$

Sol/

$$-3(x - 4)^2 \leq g(x) - 5 \leq 3(x - 4)^2$$

$$[-3(x - 4)^2 \leq g(x) - 5 \leq 3(x - 4)^2](+5)$$

$$5 - 3(x - 4)^2 \leq g(x) \leq 5 + 3(x - 4)^2$$

$$\lim_{X \rightarrow 4} 5 - 3(x - 4)^2 = 5 - 3(4 - 4)^2 = 5 \dots \dots \dots g(x)$$

$$\lim_{X \rightarrow 4} 5 + 3(x - 4)^2 = 5 + 3(4 - 4)^2 = 5 \dots \dots \dots h(x)$$

$$\therefore \lim_{X \rightarrow 4} g(x) = 5 \dots \dots \dots f(x)$$

H.W

1.  $\lim_{X \rightarrow \infty} \frac{5x^2 + \cos(7X - 2)}{x^2 + 1}$

2.  $\lim_{X \rightarrow \infty} \frac{\cos X + 2}{X + 3}$

3.  $\lim_{X \rightarrow 0} x^2 \sin \frac{1}{x^2}$

4.  $\lim_{X \rightarrow 0} 3 - x^2 \cos \frac{1}{x}$

## Exercises 1.2

### Limit Calculations

Find the limits in Exercises 1–16.

- $\lim_{x \rightarrow -7} (2x + 5)$
- $\lim_{x \rightarrow 12} (10 - 3x)$
- $\lim_{x \rightarrow 2} (-x^2 + 5x - 2)$
- $\lim_{x \rightarrow -2} (x^3 - 2x^2 + 4x + 8)$
- $\lim_{t \rightarrow 6} 8(t - 5)(t - 7)$
- $\lim_{s \rightarrow 2/3} 3s(2s - 1)$
- $\lim_{x \rightarrow 2} \frac{x + 3}{x + 6}$
- $\lim_{x \rightarrow 5} \frac{4}{x - 7}$
- $\lim_{y \rightarrow -5} \frac{y^2}{5 - y}$
- $\lim_{y \rightarrow 2} \frac{y + 2}{y^2 + 5y + 6}$
- $\lim_{x \rightarrow -1} 3(2x - 1)^2$
- $\lim_{x \rightarrow -4} (x + 3)^{1984}$
- $\lim_{y \rightarrow -3} (5 - y)^{4/3}$
- $\lim_{z \rightarrow 0} (2z - 8)^{1/3}$
- $\lim_{h \rightarrow 0} \frac{3}{\sqrt{3h + 1} + 1}$
- $\lim_{h \rightarrow 0} \frac{5}{\sqrt{5h + 4} + 2}$

Find the limits in Exercises 17–30.

- $\lim_{x \rightarrow 5} \frac{x - 5}{x^2 - 25}$
- $\lim_{x \rightarrow -3} \frac{x + 3}{x^2 + 4x + 3}$
- $\lim_{x \rightarrow -5} \frac{x^2 + 3x - 10}{x + 5}$
- $\lim_{x \rightarrow 2} \frac{x^2 - 7x + 10}{x - 2}$
- $\lim_{t \rightarrow 1} \frac{t^2 + t - 2}{t^2 - 1}$
- $\lim_{t \rightarrow -1} \frac{t^2 + 3t + 2}{t^2 - t - 2}$
- $\lim_{x \rightarrow -2} \frac{-2x - 4}{x^3 + 2x^2}$
- $\lim_{y \rightarrow 0} \frac{5y^3 + 8y^2}{3y^4 - 16y^2}$
- $\lim_{u \rightarrow 1} \frac{u^4 - 1}{u^3 - 1}$
- $\lim_{v \rightarrow 2} \frac{v^3 - 8}{v^4 - 16}$
- $\lim_{x \rightarrow 9} \frac{\sqrt{x} - 3}{x - 9}$
- $\lim_{x \rightarrow 4} \frac{4x - x^2}{2 - \sqrt{x}}$
- $\lim_{x \rightarrow 1} \frac{x - 1}{\sqrt{x + 3} - 2}$
- $\lim_{x \rightarrow -1} \frac{\sqrt{x^2 + 8} - 3}{x + 1}$

## ANSWER

### Section 1.2, pp. 65–66

1. -9    3. 4    5. -8    7. 5/8    9. 5/2    11. 27    13. 16  
15. 3/2    17. 1/10    19. -7    21. 3/2    23. -1/2    25. 4/3  
27. 1/6    29. 4

### Using the Sandwich Theorem

43. If  $\sqrt{5 - 2x^2} \leq f(x) \leq \sqrt{5 - x^2}$  for  $-1 \leq x \leq 1$ , find  $\lim_{x \rightarrow 0} f(x)$ .
44. If  $2 - x^2 \leq g(x) \leq 2 \cos x$  for all  $x$ , find  $\lim_{x \rightarrow 0} g(x)$ .
45. a) It can be shown that the inequalities

$$1 - \frac{x^2}{6} < \frac{x \sin x}{2 - 2 \cos x} < 1$$

hold for all values of  $x$  close to zero. What, if anything, does this tell you about

$$\lim_{x \rightarrow 0} \frac{x \sin x}{2 - 2 \cos x}?$$

### ANSWER

43. a)  $-\infty$  b)  $\infty$  45. a)  $\infty$  b)  $\infty$  c)  $\infty$  d)  $\infty$
-

## Lecture Two :

### Limits Involving Infinity :-

For example, If we have

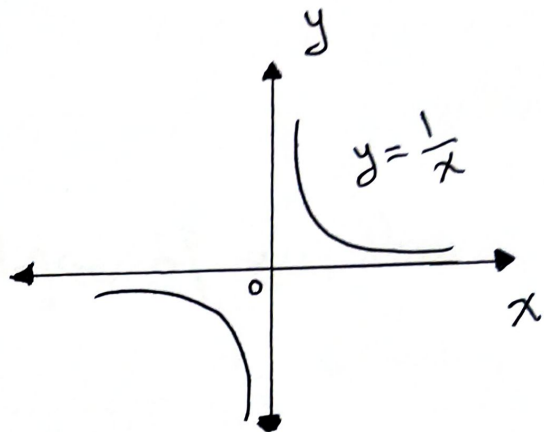
the function  $y = \frac{1}{x}$

$$\lim_{x \rightarrow \infty} \frac{1}{x} = 0 \quad \text{and} \quad \lim_{x \rightarrow -\infty} \frac{1}{x} = 0$$

Another example is a constant

function  $y = k$  :  $\lim_{x \rightarrow \infty} k = k$

$$\lim_{x \rightarrow -\infty} k = k$$



Note : the limit of  $\frac{\sin \theta}{\theta}$  as  $\theta$  approaches  $\infty$  is 0

Ex :- prove that  $\lim_{\theta \rightarrow \infty} \frac{\sin \theta}{\theta} = 0$

Sol :-

$$-1 \leq \sin \theta \leq 1$$

$$[\div \theta] \quad \frac{-1}{\theta} \leq \frac{\sin \theta}{\theta} \leq \frac{1}{\theta}$$

$$\text{Now : } \lim_{x \rightarrow \infty} \frac{-1}{\theta} = 0 \quad \text{and} \quad \lim_{\theta \rightarrow \infty} \frac{1}{\theta} = 0$$

From sandwich theorem  $\Rightarrow \lim_{\theta \rightarrow \infty} \frac{\sin \theta}{\theta} = 0$

Limits of rational functions as  $x$  approaches  $\pm\infty$ .

Rules :- For the rational function  $\frac{f(x)}{g(x)}$

1. If degree of  $f(x)$  less than degree of  $g(x)$

$$\text{then } \lim_{x \rightarrow \pm\infty} \frac{f(x)}{g(x)} = 0.$$

2. If degree of  $f(x)$  equals degree of  $g(x)$  then

$$\lim_{x \rightarrow \pm\infty} \frac{f(x)}{g(x)} \text{ is finite.}$$

3. If degree of  $f(x)$  greater than degree of  $g(x)$

$$\text{then } \lim_{x \rightarrow \pm\infty} \text{ is infinite.}$$

- To solve the limit problem of rational functions as  $x$  approaches  $\pm\infty$ , divide both the numerator and the denominator by the highest power of  $x$  in denominator.

Ex :-

$$1. \lim_{x \rightarrow \infty} \frac{3x+1}{x^2-5} = 0 \quad \left[ \begin{array}{l} \text{deg. of numerator less than} \\ \text{deg. of denominator} \end{array} \right]$$

$$2. \lim_{x \rightarrow \infty} \frac{-x}{7x+3} = \lim_{x \rightarrow \infty} \frac{-x/x}{(7x/x + 3/x)}$$

$$= \lim_{x \rightarrow \infty} \frac{-1}{7 + 3/x} = -1/7$$

$$3. \lim_{x \rightarrow \infty} \frac{-4x^3 + 7x}{2x^2 - 3x - 10}$$

$$\lim_{x \rightarrow \infty} \frac{(-4x^3/x^2) + (7x/x^2)}{(2x^2/x^2) - (3x/x^2) - (10/x^2)}$$

$$\lim_{x \rightarrow \infty} \frac{-4x + 7/x}{2 - 3/x - 10/x^2}$$

$$= \frac{-\infty + 0}{2 - 0 - 0} = \frac{-\infty}{2} = -\infty$$

$$4. \lim_{x \rightarrow \infty} \frac{\cos 1/x}{1 + 1/x} = \frac{\cos 0}{1 + 0} = 1$$

$$5. \lim_{x \rightarrow \infty} x \sin 1/x$$

$$\lim_{x \rightarrow \infty} x \sin \frac{1}{x}$$

$$= \lim_{\theta \rightarrow 0} \frac{1}{\theta} \sin \theta = 1$$

$$\text{let } \theta = \frac{1}{x}$$

$$\text{as } x \rightarrow \infty$$

$$\text{then } \theta \rightarrow 0$$