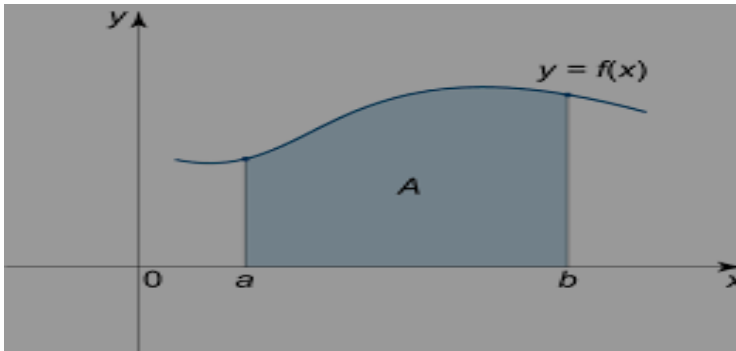


2.13 Integration application/area under the curve

1. The area under the curve

Define: Let F be continuing function over the closed value $[a, b]$, then the area under the curve define: -



$$A = \int_a^b f(x) dx \quad \text{with } x - \text{axis}$$

$$\text{Or } A = \int_a^b f(y) dy \quad \text{with } y - \text{axis}$$

Example 1: Find the area under the curve bounded by the curve $y = \sqrt{x}$ and $0 \leq x \leq 1$ with the $x - \text{axis}$

Solution //

$$A = \int_a^b f(x) dx \quad \rightarrow \quad A = \int_0^1 \sqrt{x} dx = \frac{x^{\frac{3}{2}}}{\frac{3}{2}} \Big|_0^1 = \frac{2}{3} \text{unit}^2$$

Example 1: Find the area bounded by the curve $y = x - x^2$. with $x - axis$.

Solution /

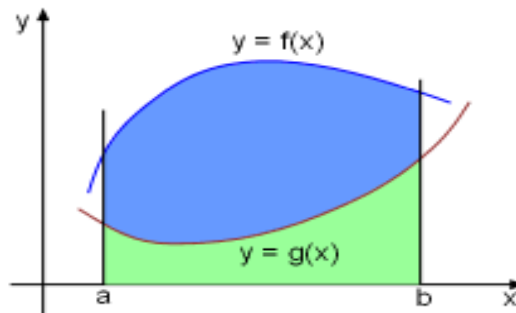
$$y = x - x^2. \text{ with } x - \text{axis} \rightarrow 0 = x - x^2 \rightarrow x(1 - x^2) = 0$$

$$x=0 \text{ \& \ } x=1$$

$$A = \int_0^1 (x - x^2) dx = \left. \frac{x^2}{2} - \frac{x^3}{3} \right|_0^1 = \frac{1}{6} \text{ unit}^2$$

2. The area between two curve

Define: Let F_1 & F_2 are two functions over the closed value $[a, b]$, then between two curves define as follows:-



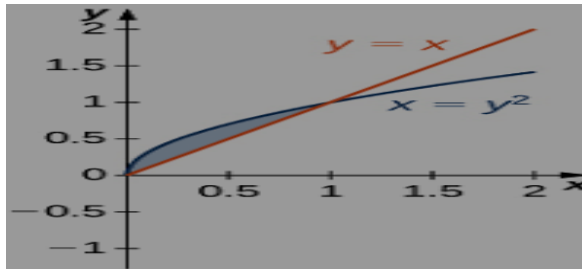
$$A = \int_a^b |f_1(x) - f_2(x)| dx \quad \text{with } x - \text{axis}$$

Or
$$A = \int_a^b |f_1(y) - f_2(y)| dx \quad \text{with } y - \text{axis}$$

Example 1: Find the area of region bonded by the curves

$$y = \sqrt{x} \quad \& \quad y = x$$

Solution //



$$\sqrt{x} = x \rightarrow x - x^2 = 0 \rightarrow x(1 - x) = 0$$

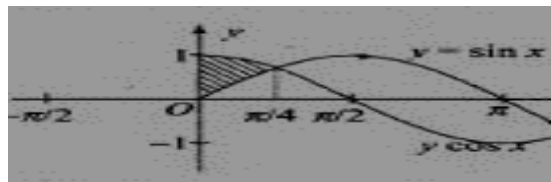
$$x = 0 \quad \& \quad x = 1$$

$$A = \int_0^1 (\sqrt{x} - x) dx = \left. \frac{x^{3/2}}{3/2} - \frac{x^2}{2} \right|_0^1 = \frac{1}{6} \text{ unit}^2$$

Example 2: Find the area of region bonded by the curves

$$y = \sin x \quad \& \quad y = \cos x \quad \text{bounded by the lines } x = 0 \quad \& \quad x = \frac{\pi}{2}$$

solution //



$$\sin x = \cos x \rightarrow \frac{\sin x}{\cos x} = 1 \rightarrow \tan x = 1$$

$$x = \frac{\pi}{4} \in (0, \frac{\pi}{2})$$

$$A = \int_0^{\frac{\pi}{4}} (\cos x - \sin x) dx + \int_{\frac{\pi}{4}}^{\frac{\pi}{2}} (\sin x - \cos x) dx$$

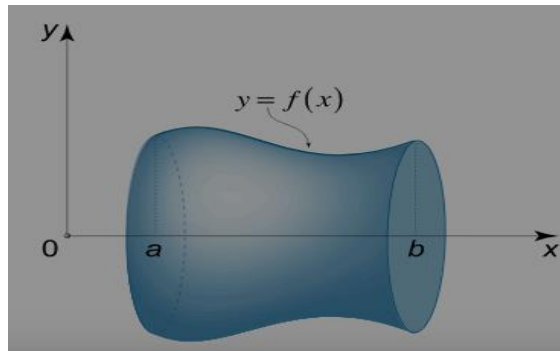
$$= \sin x + \cos x \Big|_0^{\frac{\pi}{4}} + (-\cos x - \sin x) \Big|_{\frac{\pi}{4}}^{\frac{\pi}{2}} =$$

$$\left(\frac{2}{\sqrt{2}} - 1\right) - \left(1 - \frac{2}{\sqrt{2}}\right) = \frac{4 - 2\sqrt{2}}{\sqrt{2}} \text{ unit}^2$$

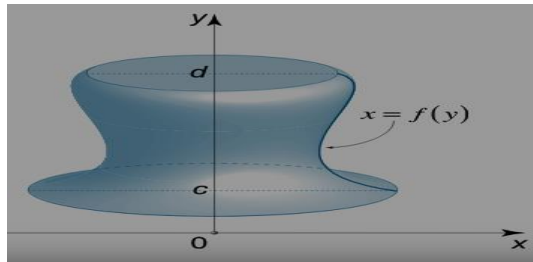
2.14 Integration application/volume

A) by disk

1. Rotation with x-axis $[V = \pi \int_a^b [f(x)]^2 dx]$



2. Rotation with y-axis $[V=\pi \int_a^b [f(y)]^2 dy]$



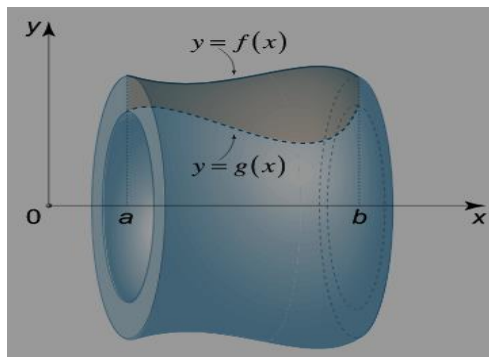
Example: Find the volume of the solid generated by revolving curve $y = \sqrt{x}$ with x - axis from $x = 0$ to $x = 1$

Solution/

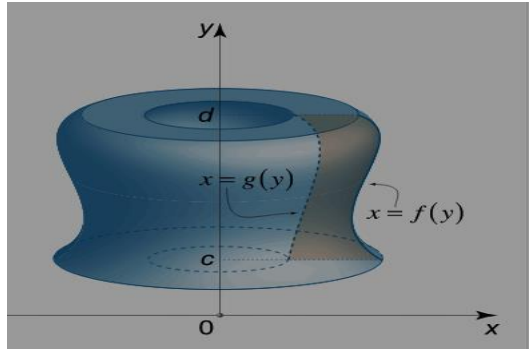
$$V = \pi \int_0^1 [\sqrt{x}]^2 dx = \frac{\pi}{2} \text{unit}^3$$

B) by washer

1. Rotation with x-axis $[V=\pi \int_a^b [f1(x)^2 - f2(x)^2] dx]$



2. Rotation with y-axis $[V = \pi \int_a^b [f_1(y)^2 - f_2(y)^2] dy]$



Example: Find the volume of the solid bounded by revolving curve $y = \sqrt{x}$ & $y = x$. *is revolving with*

a). *x – axis*

b). *y – axis*

Solution//

a). *x – axis* $\sqrt{x} = x \rightarrow x - x^2 = 0 \rightarrow x(1 - x) = 0$
 $x=0$ & $x=1$

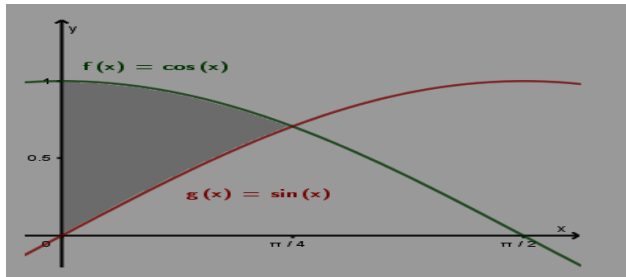
$$V = \pi \int_0^1 ((\sqrt{x})^2 - x^2) dx = \pi \left(\frac{x^2}{2} - \frac{x^3}{3} \Big|_0^1 \right) = \frac{\pi}{6} \text{unit}^3$$

b). *y – axis* $x_1 = x_2 \rightarrow y = y^2 \rightarrow y - y^2 = 0$
 $y=0$ & $y=1$

$$V = \pi \int_0^1 (y)^2 - y^4) dx = \pi \left(\frac{1}{3} - \frac{1}{5} \right) = \frac{2\pi}{15} \text{ unit}^3$$

Example: Find the volume of the solid bonded by the curves $y = \sin x$ & $y = \cos x$. $0 \leq x \leq \frac{\pi}{2}$ is revolved about the x -axis

Solution//



$$\sin x = \cos x \rightarrow \frac{\sin x}{\cos x} = 1 \rightarrow \tan x = 1$$

$$x = \frac{\pi}{4} \in (0, \frac{\pi}{2})$$

$$V = \pi \left[\int_0^{\frac{\pi}{4}} ((\cos x)^2 - (\sin x)^2) dx + \int_{\frac{\pi}{4}}^{\frac{\pi}{2}} ((\sin x)^2 - (\cos x)^2) dx \right]$$

$$V = \pi \text{ unit}^3$$