



Electricity and Magnetism

Lecture Six

Electric potential, Potential and the electric field and A group of point charges

Dr. Mohammed Hashim Abbas

Dr. Ameen Alwan

first stage

Department of medical physics

Al-Mustaqbal University-College

2021- 2022

Outline

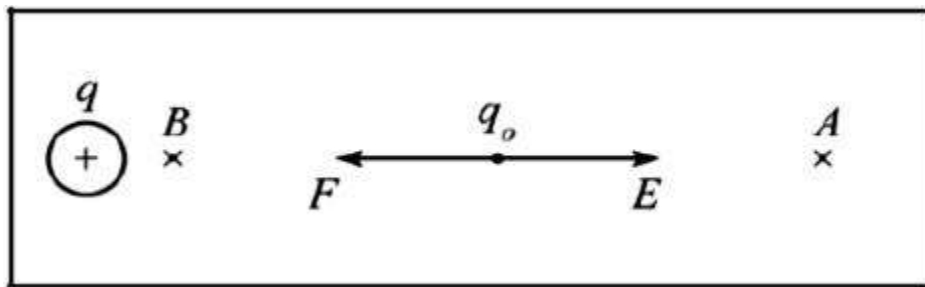
- 1. Electric potential**
- 2. Potential and the electric field**
- 3. A group of point charges**
- 4. References**

1. Electric potential

When a test charge q^0 is placed in an electric field E created by some other charged object, the electric force acting on the test charge is q^0E .

The force $q_0 E$ is conservative, because the force between charges described

by **Coulomb's law** is conservative. If the test charge is moved in the field by some external agent from point A to point B by a displacement ds , the work done by the electric field on the charge is equal to the negative of the work done by the external agent causing the displacement.



For an infinitesimal displacement ds , the work done by the electric field on the charge is:

$$W = \vec{F} \cdot \vec{ds} \Rightarrow W = q_0 \vec{E} \cdot \vec{ds}$$

As this amount of work is done by the electric field, the potential

energy of the charge field system is decreased by an amount:

$$dU = -q_0 \vec{E} \cdot d\vec{s}$$

The change in potential energy of the system is:

$$\Delta U = U_B - U_A$$

$$\Delta U = -q_0 \int_A^B \mathbf{E} \cdot d\mathbf{s} \dots\dots\dots (1)$$

The potential energy per unit charge U/q_0 is independent of the value of q_0 and has a value at every point in an electric field. This quantity U/q_0 is called the **electric potential V**.

Thus, the electric potential at any point in an electric field is

$$V = \frac{U}{q_0}$$

..... (2)

Note: The fact that potential energy U is a scalar quantity means that electric potential V also is a scalar quantity.

2. Potential and the electric field

When the electric field E is directed downward as shown in Figure 1, a point B is at a lower electric potential than point A . When a positive test charge moves from point A to point B , it loses electric potential energy.

Electric field lines always point in the direction of decreasing electric potential, as shown in

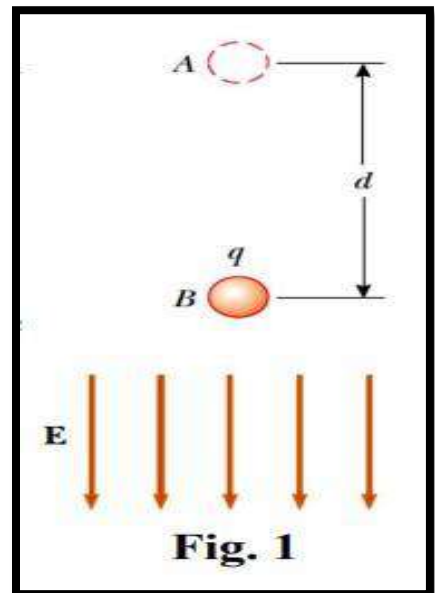


Figure 1.

Now suppose that a test charge q_0 moves from A to B. We can calculate the change in its **potential energy**

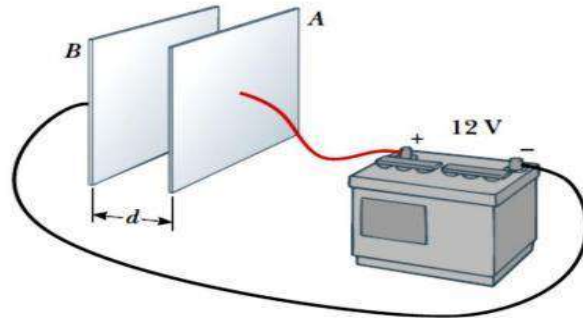
$$\Delta U = q_0 \Delta V = -q_0 E d$$

From this result, if q_0 is **positive**, then ΔU is **negative**. We conclude that a **positive** charge **loses** electric potential energy when it moves in the direction of the electric field. While q_0 is **negative**, then ΔU is **positive** and the situation is reversed: A **negative** charge **gains** electric potential energy when it moves in the direction of the electric field.

Example 1: A battery produces a specified potential difference ΔV between conductors attached to the battery terminals. A 12 V battery is connected between two parallel plates. The separation between the plates is $d = 0.3$ cm. Find the magnitude of the electric field between the plates.

Solution:

$$E = \frac{|V_B - V_A|}{d} = \frac{12 \text{ V}}{0.30 \times 10^{-2} \text{ m}}$$
$$= 4.0 \times 10^3 \text{ V/m}$$



3. A group of point charges

The **potential energy** U when the two particles are separated by a distance r_{12} (see Figure 5)

$$U = k_e \frac{q_1 q_2}{r_{12}}$$

(b) Find the change in potential energy of the system of two charges plus a charge $q_3 = 3.00 \mu\text{C}$ as the latter charge moves from infinity to point P (Figure 6b).

Solution:

$$\Delta U = U_f - U_i$$

When the charge is at infinity, $U_i = 0$, and when the charge is at P , $U_f = q_3 V_P$; therefore,

$$\begin{aligned} \Delta U &= q_3 V_P - 0 = (3.00 \times 10^{-6} \text{ C})(-6.29 \times 10^3 \text{ V}) \\ &= -18.9 \times 10^{-3} \text{ J} \end{aligned}$$

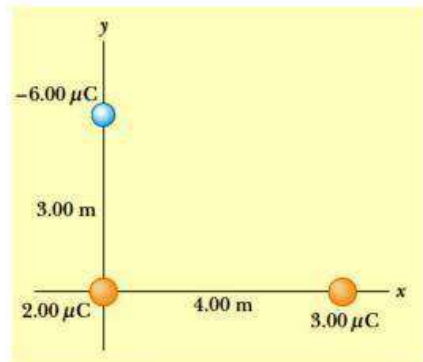


Fig. 6 (b)

4. Reference

Walker, Jearl, Robert Resnick, and David Halliday. Halliday and resnick fundamentals of physics. Wiley, 2014.